

Exercise 2B

1 a $a = \frac{9}{4} = 2.25$

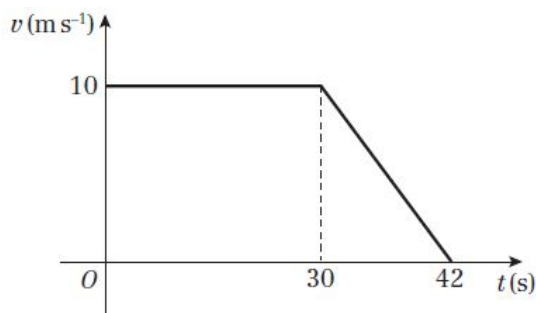
The athlete accelerates at a rate of 2.25 m s^{-2} .

b $s = \frac{1}{2}(a + b)h$

$$= \frac{1}{2}(8 + 12) \times 9 = 90$$

The displacement of the athlete after 12 s is 90 m.

2 a



b $s = \frac{1}{2}(a + b)h$

$$= \frac{1}{2}(30 + 42) \times 10 = 360$$

The distance from A to B is 360 m.

3 a $a = \frac{8}{20} = 0.4$

The acceleration of the cyclist is 0.4 m s^{-2} .

b $a = -\frac{8}{15} = -0.533$ (to 3 s.f.)

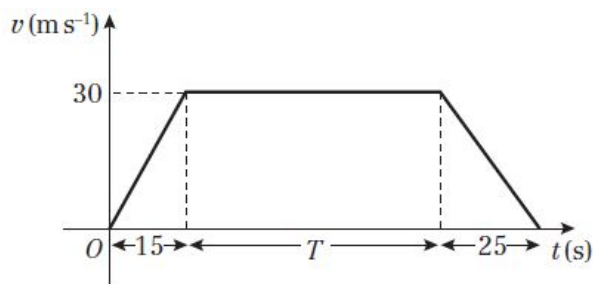
The deceleration of the cyclist is 0.533 m s^{-2} .

c $s = \frac{1}{2}(a + b)h$

$$= \frac{1}{2}(40 + 75) \times 8 = 460$$

After 75 s, the displacement of the cyclist is 460 m.

4 a



$$\mathbf{b} \quad s = \frac{1}{2}(a + b)h$$

$$2400 = \frac{1}{2}(T + (15 + T + 25)) \times 30$$

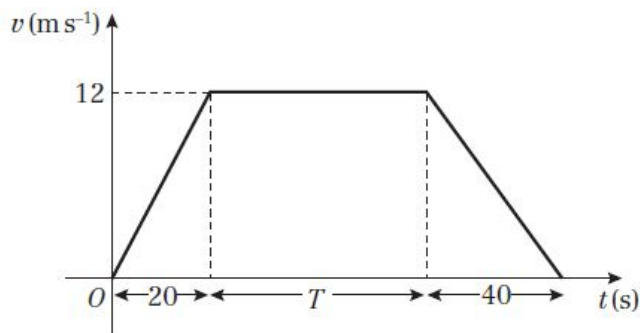
$$= 15(2T + 40)$$

$$2T + 40 = \frac{2400}{15} = 160$$

$$T = \frac{160 - 40}{2} = 60$$

The time taken to travel from S to F is $(15 + T + 25) = 100$ s.

5 a The velocity after 20 s is given by



$$\text{velocity} = \text{acceleration} \times \text{time} = 0.6 \times 20 = 12$$

$$\mathbf{b} \quad s = \frac{1}{2}(a + b)h$$

$$4200 = \frac{1}{2}(T + (20 + T + 40)) \times 12$$

$$= 6(2T + 60)$$

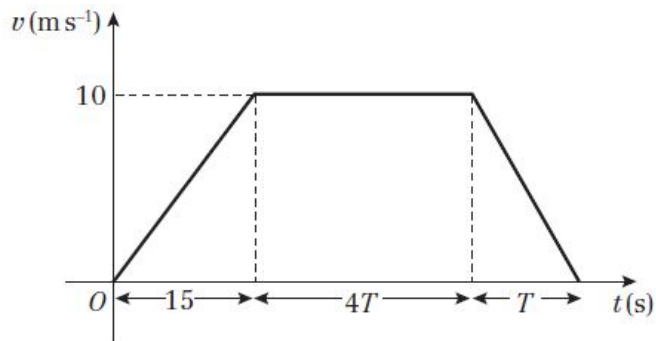
$$2T + 60 = \frac{4200}{6} = 700$$

$$T = \frac{700 - 60}{2} = 320$$

c While at constant velocity: $v = 12 \text{ m s}^{-1}$, $t = 320$ s

$$\text{distance travelled} = 12 \times 320 = 3840 \text{ m}$$

6 a



$$b \quad s = \frac{1}{2}(a+b)h$$

$$\begin{aligned} 480 &= \frac{1}{2}(4T + (15 + 4T + T))10 \\ &= 5 \times (15 + 9T) \\ 9T + 15 &= \frac{480}{5} = 96 \end{aligned}$$

$$T = \frac{96 - 15}{9} = 9$$

$$\text{Total time travelling} = 15 + 5T = 15 + (5 \times 9) = 60$$

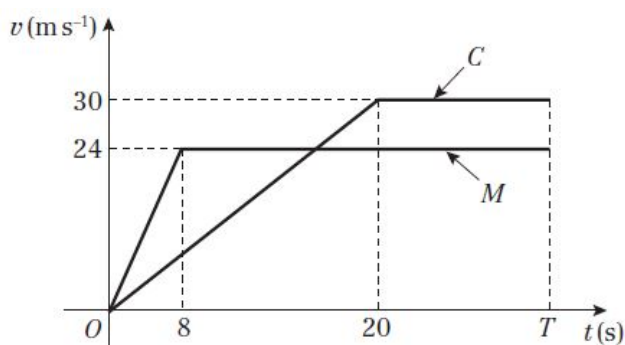
The particle travels for a total of 60 s.

7 a Area = trapezium + rectangle + triangle

$$\begin{aligned} 100 &= \frac{1}{2}(u+10) \times 3 + 7 \times 10 + \frac{1}{2} \times 2 \times 10 \\ &= \frac{3}{2}(u+10) + 70 + 10 \\ \frac{3}{2}(u+10) &= 100 - 70 - 10 = 20 \\ u &= 20 \times \frac{2}{3} - 10 \\ &= \frac{10}{3} \end{aligned}$$

$$b \quad a = \frac{10 - \frac{10}{3}}{3} = \frac{20}{9} = 2.22 \text{ (to 3 s.f.)}$$

The acceleration of the particle is 2.22 m s^{-2} .

8 a For M , velocity = acceleration \times time = $3 \times 8 = 24$ 

- 8 b Let C overtake M at time T seconds.

The distance travelled by M is given by

$$\begin{aligned} s &= \frac{1}{2}(8 \times 24) + 24 \times (T - 8) \\ &= 24(T - 4) \end{aligned}$$

The distance travelled by C is given by

$$\begin{aligned} s &= \frac{1}{2}(a + b)h = \frac{1}{2}(T - 20 + T) \times 30 \\ &= 15(2T - 20) \end{aligned}$$

At the point of overtaking the distances are equal.

$$\begin{aligned} 24(T - 4) &= 15(2T - 20) \\ 24T - 96 &= 30T - 300 \\ 6T &= 204 \\ T &= \frac{204}{6} = 34 \end{aligned}$$

$$\begin{aligned} s &= 24(T - 4) \\ &= 24(34 - 4) = 720 \end{aligned}$$

The distance of the pedestrian from the road junction is 720 m.

Challenge

- a The object changed direction after 6 s, as this is when the velocity changed from positive to negative.
- b While travelling at positive velocity:

$$s_p = \frac{1}{2}(1 + 6) \times 3 = \frac{1}{2} \times 21 = 10.5$$

While travelling at negative velocity:

$$s_n = \frac{1}{2}(4 + 2) \times 2 = \frac{1}{2} \times 12 = 6$$

The total distance travelled by the object = $s_p + s_n = 10.5 + 6 = 16.5$ m

- c i Using the value calculated in **b**, after 6 s the displacement of the object is $s_p = 10.5$ m.
- ii In the first 6 seconds, displacement is positive.
In the last 4 seconds, displacement is negative.

Hence, using the values calculated in **b**, total displacement = $s_p + (-s_n) = 10.5 + (-6) = 4.5$ m.